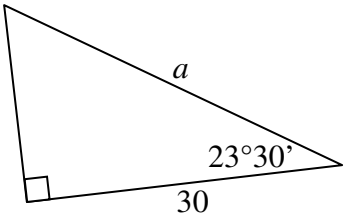
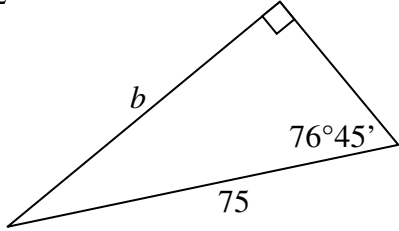
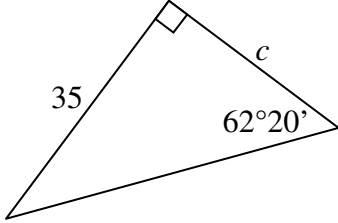
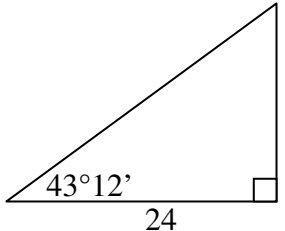
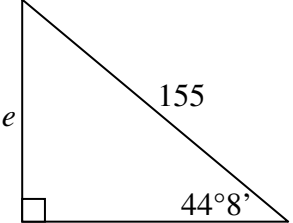
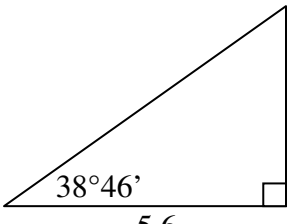
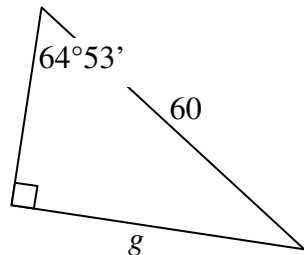
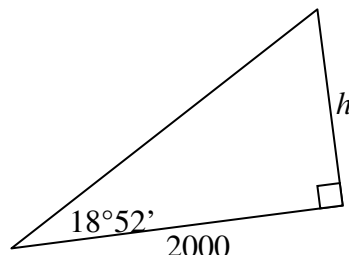
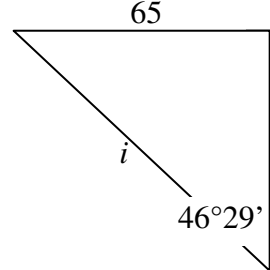
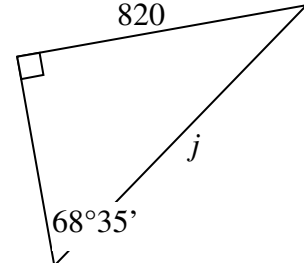
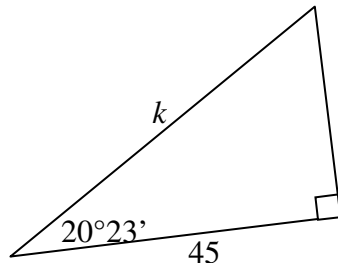
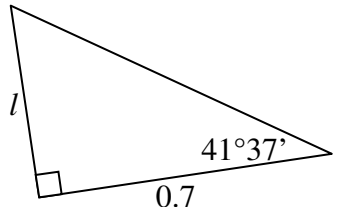
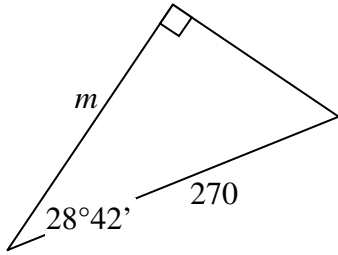
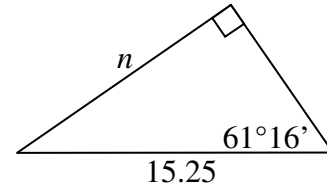
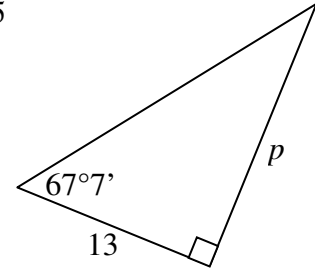
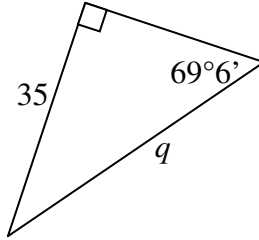
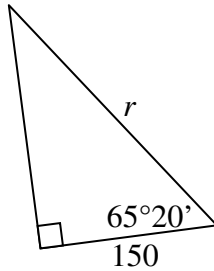
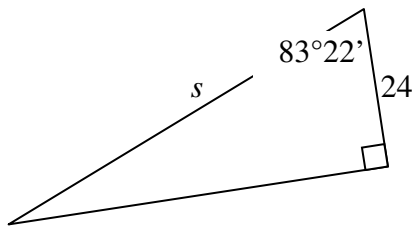
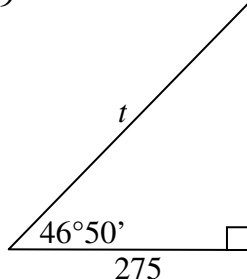
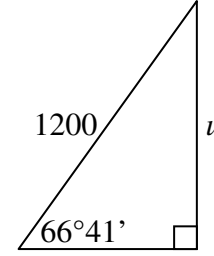


Mixed Ratios and Reciprocal Ratios

Find the value of the pronumerals in each of the following, correct to 1 dec. pl. where necessary;

| | | | | |
|---|---|--|---|---|
| <p>1</p>  | <p>2</p>  | <p>3</p>  | <p>4</p>  | <p>5</p>  |
| <p>6</p>  | <p>7</p>  | <p>8</p>  | <p>9</p>  | <p>10</p>  |
| <p>11</p>  | <p>12</p>  | <p>13</p>  | <p>14</p>  | <p>15</p>  |
| <p>16</p>  | <p>17</p>  | <p>18</p>  | <p>19</p>  | <p>20</p>  |